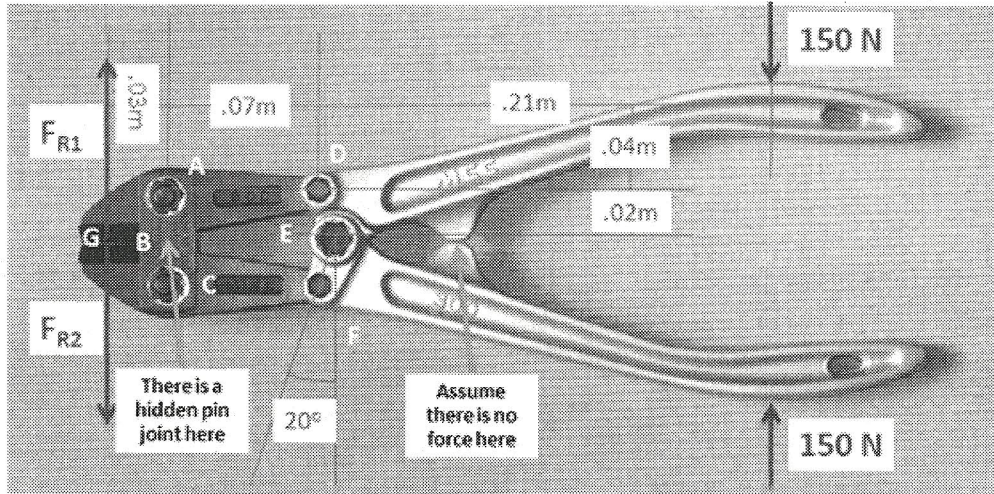


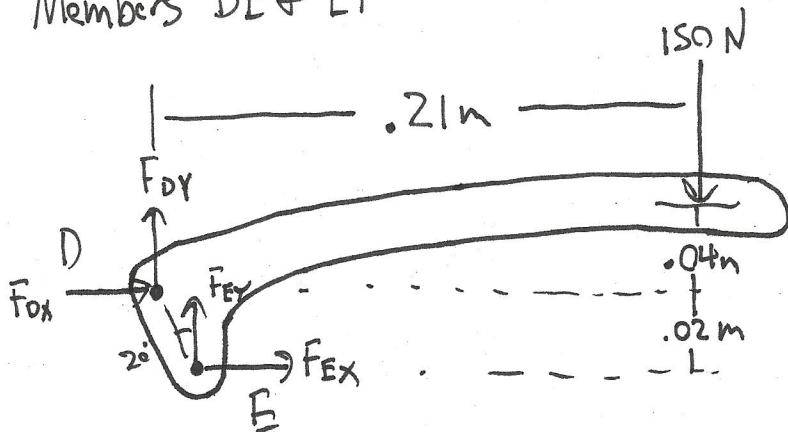
Question 3:

Find all the forces acting on each of the members in the structure below.



Calculations:

Members DE + EF

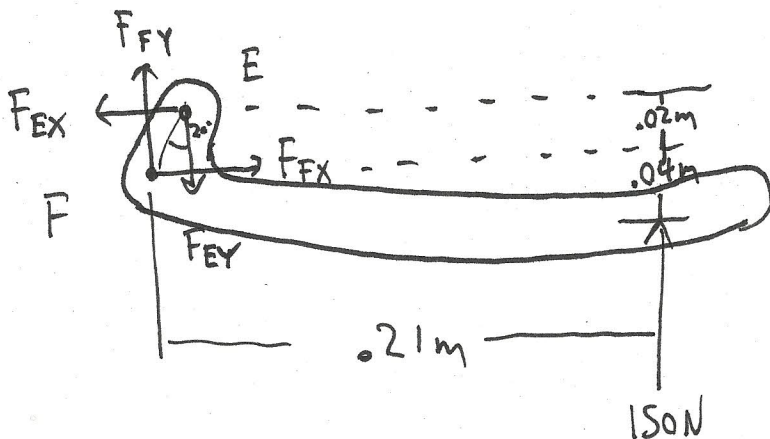


top handle

$$\sum F_x = F_{DX} + F_{EX} = 0$$

$$\sum F_y = F_{DY} + F_{EY} - 150 = 0$$

$$\sum M_D = (.02)F_{EX} + (.02 \tan(20))(F_{EY}) - (.21)(150) = 0$$



bottom handle

$$\sum F_x = -F_{EX} + F_{FX} = 0$$

$$\sum F_y = -F_{EY} + F_{FY} + 150 = 0$$

$$\sum M_F = (.02)F_{EX} - (.02 \tan(20))(F_{EY}) + (.21)(150) = 0$$

$$F_{DX} + F_{EX} = 0$$

$$F_{DY} + F_{EY} = 150$$

$$.02 F_{EX} + .02 \tan(20) F_{EY} = 31.5$$

$$-F_{EX} + F_{FX} = 0$$

$$-F_{EY} + F_{FY} = -150$$

$$.02 F_{EX} - .02 \tan(20) F_{EY} = -31.5$$

$$\begin{bmatrix} F_{DX} \\ F_{DY} \\ F_{EX} \\ F_{EY} \\ F_{FX} \\ F_{FY} \end{bmatrix} = \begin{bmatrix} 1 & 0 & 1 & 0 & 0 & 0 \\ 0 & 1 & 0 & 1 & 0 & 0 \\ 0 & 0 & .02 & .02 \tan(20) & 0 & 0 \\ 0 & 0 & -1 & 0 & 1 & 0 \\ 0 & 0 & 0 & -1 & 0 & 1 \\ 0 & 0 & .02 & -.02 \tan(20) & 0 & 0 \end{bmatrix} \begin{bmatrix} F_{DX} \\ F_{DY} \\ F_{EX} \\ F_{EY} \\ F_{FX} \\ F_{FY} \end{bmatrix} = \begin{bmatrix} 0 \\ 150 \\ 31.5 \\ 0 \\ -150 \\ -31.5 \end{bmatrix}$$

$$F_{DX} = 0$$

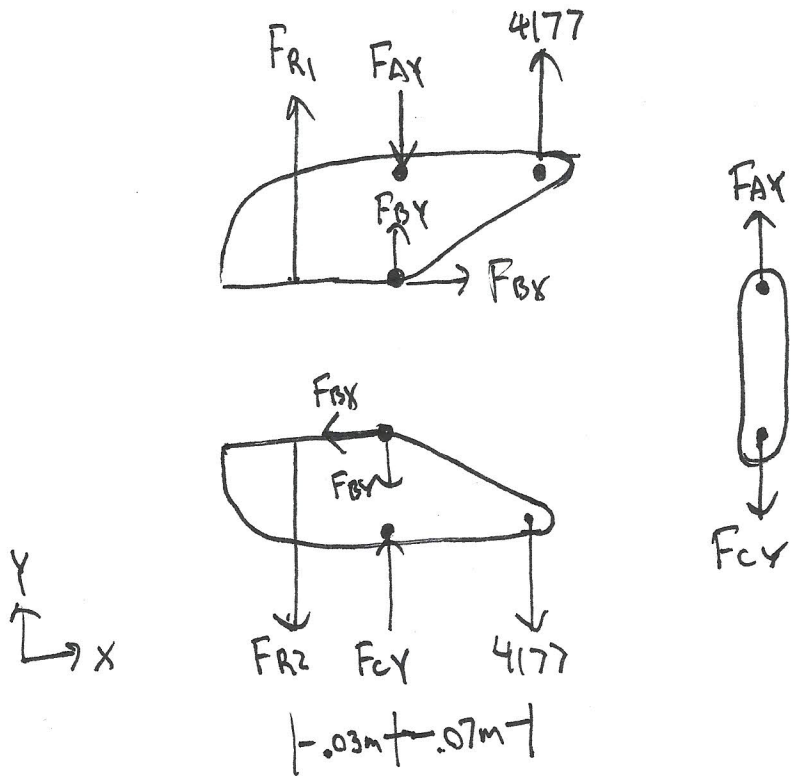
$$F_{DY} = -4177 \text{ N}$$

$$F_{EX} = 0$$

$$F_{EY} = 4327 \text{ N}$$

$$F_{FX} = 0$$

$$F_{FY} = 4177 \text{ N}$$



Top Blade

$$\sum F_x = F_{Bx} = 0$$

$$\sum F_y = F_{R1} + F_{By} - F_{Ay} + 4177 = 0$$

$$\sum M_B = -(0.03)F_{R1} + (0.07)4177 = 0$$

Bottom Blade

$$\sum F_x = -F_{Bx} = 0$$

$$\sum F_y = -F_{R2} - F_{By} + F_{cy} - 4177 = 0$$

$$\sum M_B = (0.03)F_{R2} - (0.07)4177 = 0$$

Connector

$$F_{Ay} = F_{cy}$$

$$F_{R1} = \frac{(0.07) 4177}{(0.03)} = 9746 \text{ N}$$

$$F_{R2} = \frac{(0.07) 4177}{(0.03)} = 9746 \text{ N}$$