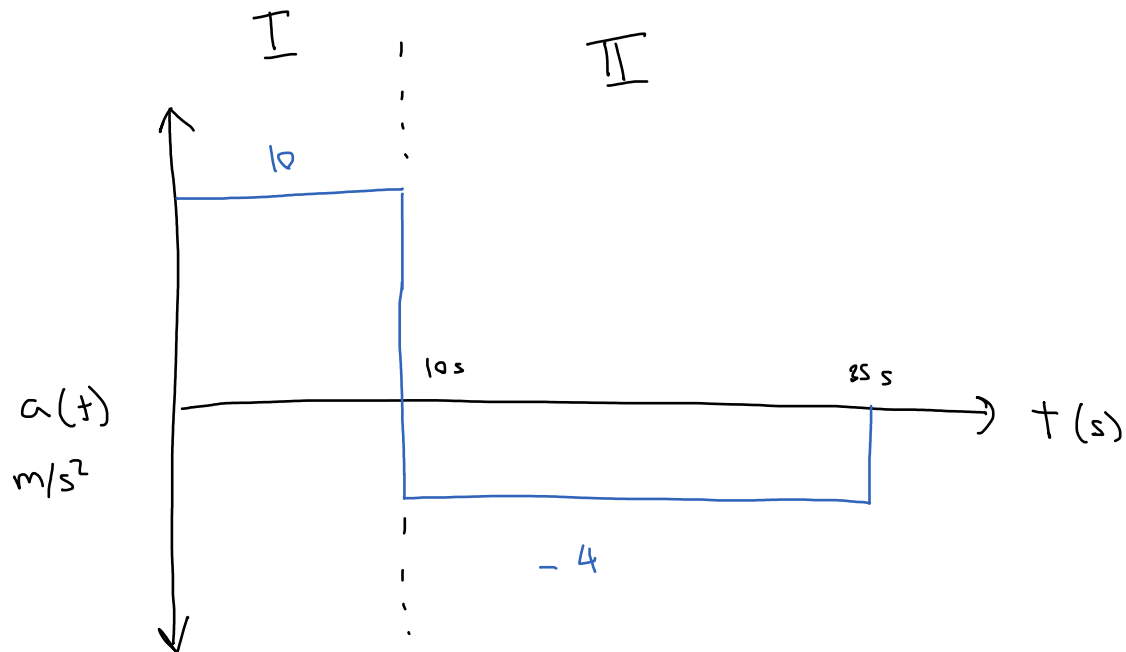
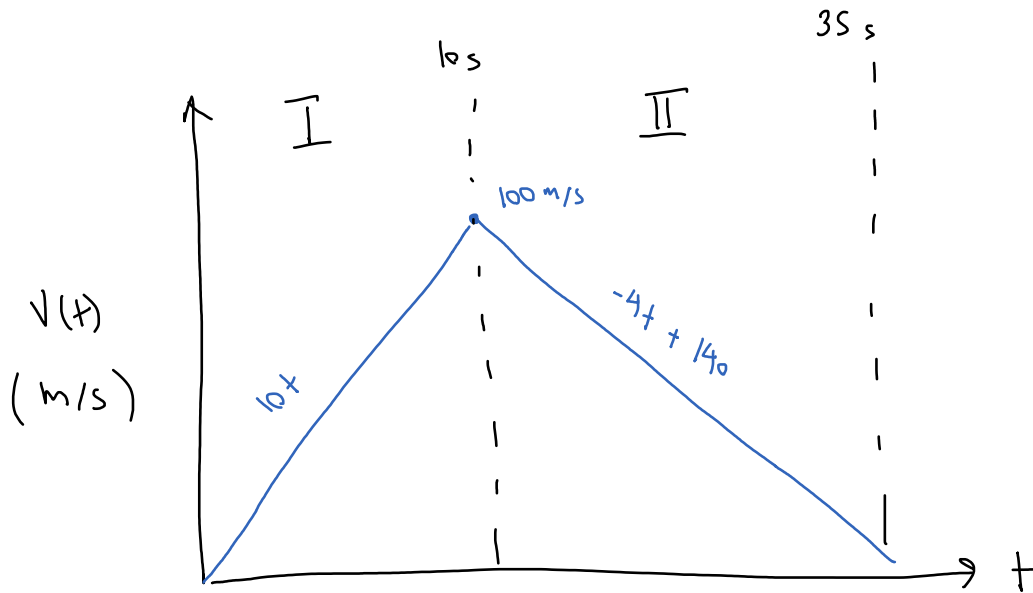


Question 1:

A car accelerates from rest at a rate of 10 m/s^2 for 10 seconds. The car then immediately begins decelerating at a rate of 4 m/s^2 for another 25 seconds before coming to a stop. Find the equations for the acceleration, velocity, and position functions over the full 35 second time period and plot these functions.





$$\text{I} \quad v(t) = \int a(t) = \int 10$$

$$\underline{v(t) = 10t + C} \quad \leftarrow V_0 = 0$$

$$v(10) = 100 \quad \downarrow$$

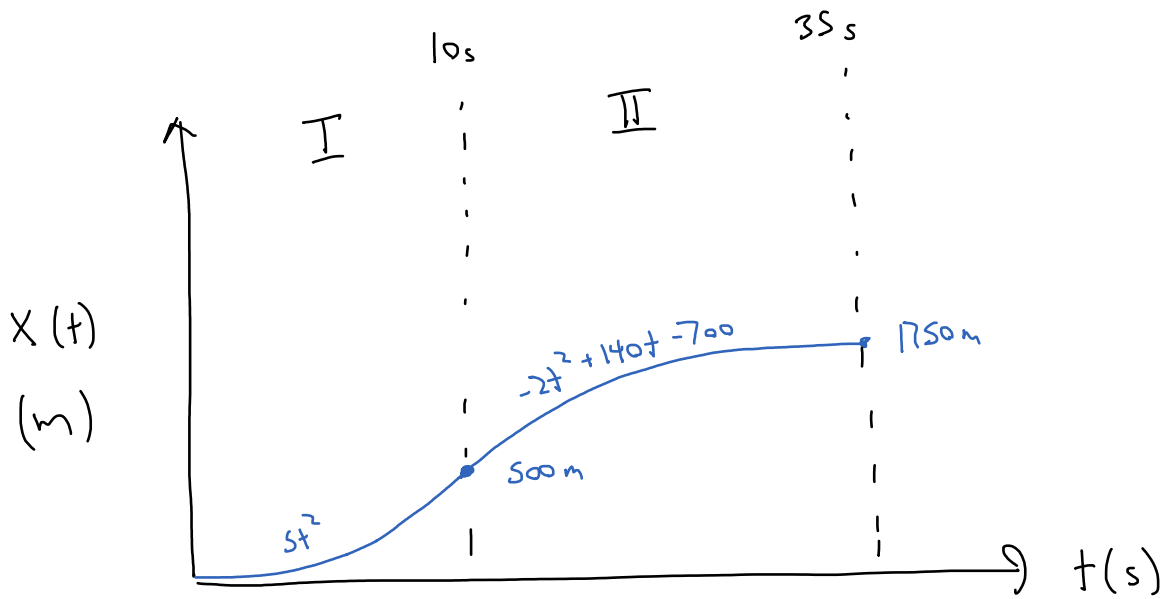
$$\text{II} \quad v(t) = \int a(t) = \int -4$$

$$v(t) = -4t + C \quad \leftarrow$$

$$\text{when } t = 10 \\ v = 100$$

$$C = 140$$

$$\underline{v(t) = -4t + 140}$$



I

$$X(t) = \int V(t) = \int 10t$$

$$\underline{X(t) = 5t^2 + C} \quad \leftarrow X_0 = 0$$

$$X(10) = 500$$

II

$$X(t) = \int V(t) = \int -4t + 140$$

$$X(t) = -2t^2 + 140t + C \quad \leftarrow \begin{array}{l} \text{When } t=10 \\ X(t) = 500 \end{array}$$

$$C = -700$$

$$\underline{X(t) = -2t^2 + 140t - 700}$$